

VILLA THERESA HIGH SCHOOL, MUMBAI

Std.: I

Activity Sheet – December 2016

Time: 40 mins.

Date: 16 / 12 / 2016

Subject: Mathematics

Marks: 10

NAME: _____ Div.: _____ ROLL NO.: _____

1. Write the number names:

(2)

1. 295 _____

2. 271 _____

2. Addition:

(2)

1. $5 + 3 =$ _____

2. $3 + 2 =$ _____

3. $2 + 7 =$ _____

4. $6 + 1 =$ _____

3. Add the following:

A.

(2)

$$\begin{array}{r} \text{T O} \\ 36 \\ +42 \\ \hline \end{array}$$

$$\begin{array}{r} \text{T O} \\ 45 \\ +12 \\ \hline \end{array}$$

$$\begin{array}{r} \text{T O} \\ 21 \\ +32 \\ \hline \end{array}$$

$$\begin{array}{r} \text{T O} \\ 65 \\ +30 \\ \hline \end{array}$$

B.

(2)

$$\begin{array}{r} \text{O} \\ 4 \\ +2 \\ \hline \end{array}$$

$$\begin{array}{r} \text{O} \\ 6 \\ +5 \\ \hline \end{array}$$

$$\begin{array}{r} \text{O} \\ 3 \\ +3 \\ \hline \end{array}$$

$$\begin{array}{r} \text{O} \\ 4 \\ +5 \\ \hline \end{array}$$

C.


(2)

$$\begin{array}{r} \text{H T O} \\ 104 \\ +344 \\ \hline \end{array}$$

$$\begin{array}{r} \text{H T O} \\ 551 \\ +310 \\ \hline \end{array}$$

$$\begin{array}{r} \text{H T O} \\ 632 \\ +156 \\ \hline \end{array}$$

$$\begin{array}{r} \text{H T O} \\ 373 \\ +011 \\ \hline \end{array}$$



VILLA THERESA HIGH SCHOOL, MUMBAI

Std.: I

Activity Sheet -- December 2016

Date: 19/12/2016

Subject: Language

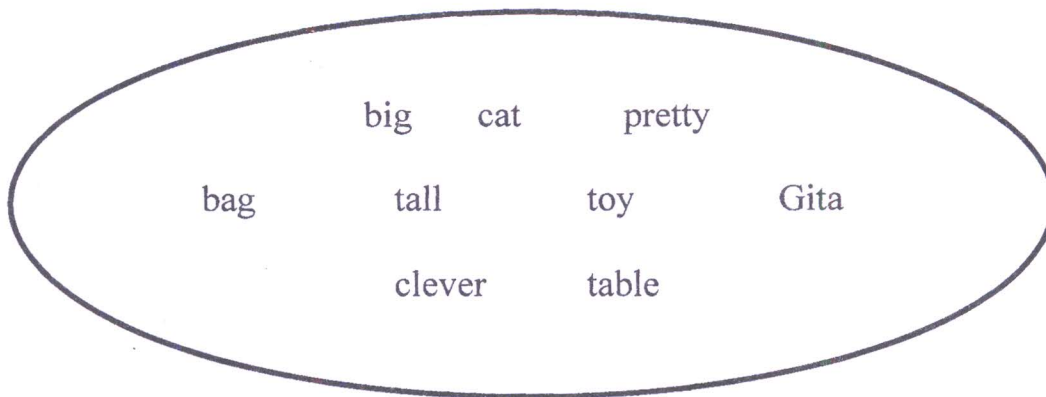
Marks: 10

NAME: _____ Div.: _____ ROLL NO.: _____

1. Fill in the blanks with a describing word: (4)

- 1. The _____ dog ran behind the cat.
- 2. Anne has a _____ dress.
- 3. The elephant is a _____ animal.
- 4. Mumbai is a _____ city.

2. Circle the describing words: (2)



3. Match the columns: (2)

- | | |
|----------|----------|
| 1. big | a. dress |
| 2. long | b. teeth |
| 3. sharp | c. table |
| 4. red | d. tail |

1. _____ 2. _____ 3. _____ 4. _____

4. Choose the correct words: (2)

Lovely, blue, small, big

It was a _____ day. There was a pond beside the _____ tree. There were _____ birds sitting on the tree. Some children were playing with a _____ ball.



VILLA THERESA HIGH SCHOOL, MUMBAI

STD. I

ACTIVITY SHEET DECEMBER 2016


19/12/2016

SUBJECT: EVS

MARKS : 10

NAME: _____ Div: _____ ROLL NO.: _____

I Draw a plant and write the parts of the plant. [5]



II Name the following [3]

1. Two creepers _____
2. Medicinal plant _____

III Answer the following [2]

Write two uses of plants

