

VILLA THERESA HIGH SCHOOL, MUMBAI

Std.: II
Date: 3/4/2017

Final Exam – March 2017
Subject : Mathematics

Time : 2hrs.
Marks : 30

Name - _____ Div.: _____ Roll No - _____

QI. Do as directed: [4]

a) Write thirty rupees and twenty- five paise in figures. _____

b) Write Rs 264.15 in words.

c) Find the sum of the given rupees :



d) kg g (Put < , > sign)

QII. Name the unit of measures :

[6]

a)

b)

c)



e) My mother bought 5 _____ tomatoes from the green grocer.

f) The distance between Mumbai to Pune is 800 _____

g) A cough syrup bottle is of 50 _____

QIII. Look at the clock and answer the given questions: [4]



1. What is the time on this clock face ? _____

P.T.O.



2. What will the time be in 20 minutes ? _____

3. What was the time 10 minutes earlier ? _____

4. If the clock is 20 minutes slow what is the time ? _____

QIV. Complete the following :

[4]

1. Three-quarter of an hour = _____ minutes

2. A quarter hour = _____ minutes

3. Half an hour = _____ minutes

4. One day = _____ hours

QV. Add

[6]

1.

Km		m	
6		1	2
+5		7	3

Ans. = _____

2.

Kl			l
4		4	7
+8		5	0

Ans. _____

3.

Rs		P
7	2	8
+1	3	1

Ans. _____

QVI. Subtract :

[6]

1.

Kg		g	
8		2	7
-4		0	2

Ans. = _____

2.

m		cm	
9		8	6
-4		2	0

Ans. _____

3.

Rs	P	
5	6	3
-2	6	2

Ans. _____

Q1. Fill in the blanks. Choose the correct answer from the box. [5]

simulators, satellites, ATM, rockets, emails

1. The computer helps in launching and controlling _____, _____ and missiles.
2. We use _____ to learn to drive a car without using actual machine.
3. Message sent/received through computers are popularly known as _____
4. A computer helps to withdraw money from _____.

Q2. Name the place and the person who uses computer to do the following work. [6]

No	Work	Place	Person
1.	To prepare bills		
2.	To perform operations		
3.	To make report cards		


Q3. Answer the following questions. [14]

1. Mention any three skills you can learn using computers. (3)

Ans: _____

2. Write any three things that can be published using computers. (3)

Ans: _____



3. How do computers help engineers?

(2)

Ans: _____

4. What do you mean by Reservation?

(2)

Ans: _____

5. Write the use of computers in the following places.(any two)

[4]

i. Home - _____

ii. Banks - _____



VILLA THERESA HIGH SCHOOL, MUMBAI

Std.: II

Final Exams – April 2017

Time: 2hrs

Date: 05/04/2017

Subject: HINDI

Marks:30

NAME: _____ Div.: _____ ROLL NO.: _____

Q1. रिक्त स्थानों की पूर्ति करो : (4)

1. मौसम बड़ा ----- था।
2. मंदिर में ----- हो रही थी।
3. अंजलि ने ----- गिरा दिया।
4. ----- का दिन था।

Q2. प्रश्नों के उत्तर लिखो: (14)

1. भालू ने क्या बजाया?

2. हिरन और लोमड़ी क्या लेकर आए ?

3. हाथी ने क्या चलाई ?

4. माताजी ने कचौड़ी कहाँ से मँगवाई ?

5. मौसाजी रौनक और गौरी के लिए क्या लाए ?



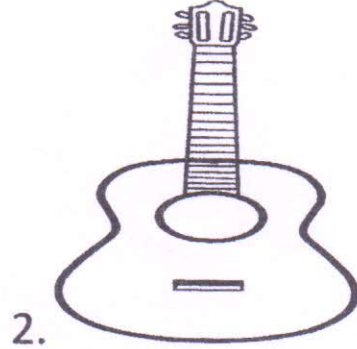
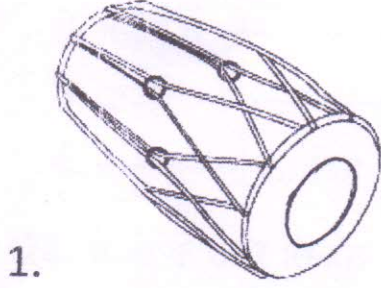
6. मंदिर के आस पास कौन थे ?

7. अंजलि और मंथन माता पिता के साथ कहाँ गए ?

P.T.O

Q3. चित्र पहचानकर शब्द लिखो :

(4)



Q4. लिंग बदलो :

(4)

1. माँ - -----

2. दादा - -----

3. नाना - -----

4. मामा - -----

Q5. विलोम शब्द :

(4)

1. बड़ा X -----

2. रोना X -----

3. अंदर X -----

4. खोल X -----
